

NAME \_\_\_\_\_














































































































































DATE \_\_\_\_\_

# Numerals, Words & Bugs

1 Trace the numerals and the number words.

<i>0 zero</i>	<i>4 four</i>	<i>8 eight</i>
<i>1 one</i>	<i>5 five</i>	<i>9 nine</i>
<i>2 two</i>	<i>6 six</i>	<i>10 ten</i>
<i>3 three</i>	<i>7 seven</i>	<i>11 eleven</i>

2 How many bugs in each frame? Write the numeral and the number word.

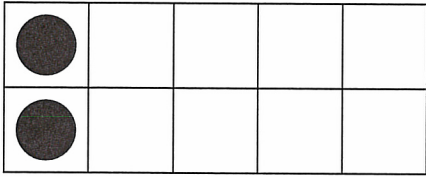









<p><b>a</b></p> <table border="1"> <tr> <td></td> <td></td> <td></td> <td></td> <td></td> </tr> <tr> <td></td> <td></td> <td></td> <td></td> <td></td> </tr> </table> <p><i>10 ten</i></p>											<p><b>b</b></p> <table border="1"> <tr> <td></td> <td></td> <td></td> <td></td> <td></td> </tr> <tr> <td></td> <td></td> <td></td> <td></td> <td></td> </tr> </table>											<p><b>c</b></p> <table border="1"> <tr> <td></td> <td></td> <td></td> <td></td> <td></td> </tr> <tr> <td></td> <td></td> <td></td> <td></td> <td></td> </tr> </table>										
																																
																																
																																
																																
<p><b>d</b></p> <table border="1"> <tr> <td></td> <td></td> <td></td> <td></td> <td></td> </tr> <tr> <td></td> <td></td> <td></td> <td></td> <td></td> </tr> </table>											<p><b>e</b></p> <table border="1"> <tr> <td></td> <td></td> <td></td> <td></td> <td></td> </tr> <tr> <td></td> <td></td> <td></td> <td></td> <td></td> </tr> </table>											<p><b>f</b></p> <table border="1"> <tr> <td></td> <td></td> <td></td> <td></td> <td></td> </tr> <tr> <td></td> <td></td> <td></td> <td></td> <td></td> </tr> </table>										
																																
																																
																																
																																
																																
<p><b>g</b></p> <table border="1"> <tr> <td></td> <td></td> <td></td> <td></td> <td></td> </tr> <tr> <td></td> <td></td> <td></td> <td></td> <td></td> </tr> </table>											<p><b>h</b></p> <table border="1"> <tr> <td></td> <td></td> <td></td> <td></td> <td></td> </tr> <tr> <td></td> <td></td> <td></td> <td></td> <td></td> </tr> </table>											<p><b>i</b></p> <table border="1"> <tr> <td></td> <td></td> <td></td> <td></td> <td></td> </tr> <tr> <td></td> <td></td> <td></td> <td></td> <td></td> </tr> </table>										
																																
																																
																																
																																

NAME \_\_\_\_\_

DATE \_\_\_\_\_

# Adding Doubles & Neighbors

1 Solve the problems below.

<p><b>a</b></p> $\begin{array}{r} 1 \\ + 1 \\ \hline \end{array}$ 	<p><b>b</b></p> $\begin{array}{r} 1 \\ + 2 \\ \hline \end{array}$ 
<p><b>c</b></p> $\begin{array}{r} 2 \\ + 2 \\ \hline \end{array}$ 	<p><b>d</b></p> $\begin{array}{r} 2 \\ + 3 \\ \hline \end{array}$ 
<p><b>e</b></p> $\begin{array}{r} 3 \\ + 3 \\ \hline \end{array}$ 	<p><b>f</b></p> $\begin{array}{r} 3 \\ + 4 \\ \hline \end{array}$ 
<p><b>g</b></p> $\begin{array}{r} 4 \\ + 4 \\ \hline \end{array}$ 	<p><b>h</b></p> $\begin{array}{r} 4 \\ + 5 \\ \hline \end{array}$ 
<p><b>i</b></p> $\begin{array}{r} 5 \\ + 4 \\ \hline \end{array}$ 	<p><b>j</b></p> $\begin{array}{r} 5 \\ + 5 \\ \hline \end{array}$ 

2 Fill in the blank.

$3 + 3 = \underline{\quad}$

$3 + 4 = \underline{\quad}$

$4 + 4 = \underline{\quad}$

$5 + 4 = \underline{\quad}$

$5 + 5 = \underline{\quad}$

$2 + 3 = \underline{\quad}$

$4 + 3 = \underline{\quad}$

$3 + 2 = \underline{\quad}$

$5 + 6 = \underline{\quad}$

NAME \_\_\_\_\_

DATE \_\_\_\_\_

# Adding Zero, One & Two



## CHALLENGE

1 Solve the addition problems.

$4 + \underline{\quad} = 6$

$4 + \underline{\quad} = 5$

$3 + \underline{\quad} = 5$

$1 + \underline{\quad} = 3$

$5 + \underline{\quad} = 6$

$3 + \underline{\quad} = 4$

$4 + \underline{\quad} = 6$

$2 + \underline{\quad} = 3$

$2 + \underline{\quad} = 4$

$\underline{\quad} + 1 = 6$

$\underline{\quad} + 2 = 10$

$\underline{\quad} + 0 = 7$

$\underline{\quad} + 2 = 5$

$\underline{\quad} + 1 = 8$


$\underline{\quad} + 0 = 6$

$\underline{\quad} + 0 = 9$

$\underline{\quad} + 2 = 7$

$\underline{\quad} + 1 = 9$

2 Count by 10's to fill in the missing numbers.



3 Solve the addition problems.

$$\begin{array}{r} 10 \\ + 20 \\ \hline \end{array}$$

$$\begin{array}{r} 20 \\ + 20 \\ \hline \end{array}$$

$$\begin{array}{r} 30 \\ + 10 \\ \hline \end{array}$$

$$\begin{array}{r} 30 \\ + 0 \\ \hline \end{array}$$

$$\begin{array}{r} 40 \\ + 10 \\ \hline \end{array}$$

$$\begin{array}{r} 60 \\ + 20 \\ \hline \end{array}$$

$$\begin{array}{r} 50 \\ + 10 \\ \hline \end{array}$$

$$\begin{array}{r} 40 \\ + 20 \\ \hline \end{array}$$

$$\begin{array}{r} 70 \\ + 20 \\ \hline \end{array}$$

$$\begin{array}{r} 10 \\ + 10 \\ \hline \end{array}$$

$$\begin{array}{r} 60 \\ + 0 \\ \hline \end{array}$$

$$\begin{array}{r} 50 \\ + 20 \\ \hline \end{array}$$

$$\begin{array}{r} 100 \\ + 0 \\ \hline \end{array}$$

$$\begin{array}{r} 70 \\ + 10 \\ \hline \end{array}$$

NAME \_\_\_\_\_

DATE \_\_\_\_\_

# Counting Coins

Use the information below to help solve the problems.



dime  
10 cents  
10¢









nickel  
5 cents  
5¢



penny  
1 cent  
1¢

1 Write the value of the coins in each row.

<p><b>a</b></p> 	<p>40¢</p>
<p><b>b</b></p> 	<p>¢</p>
<p><b>c</b></p> 	<p>¢</p>
<p><b>d</b></p> 	<p>¢</p>
<p><b>e</b></p> 	<p>¢</p>
<p><b>f</b></p> 	<p>¢</p>




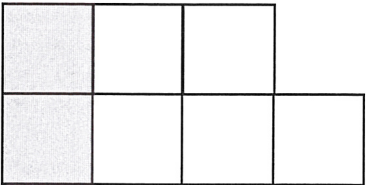




NAME \_\_\_\_\_

DATE \_\_\_\_\_

# Odds & Evens Make Seven

1 Write a number sentence to go with each picture.

<p><b>a</b></p>  <p><math>6 + 1 = 7</math></p>	<p><b>b</b></p> 
<p><b>c</b></p> 	<p><b>d</b></p> 
<p><b>e</b></p> 	<p><b>f</b></p> 

2 Fill in the blanks.

$7 + \underline{\quad} = 7$

$4 + \underline{\quad} = 7$

$5 + \underline{\quad} = 7$

$1 + \underline{\quad} = 7$



$2 + \underline{\quad} = 7$

$6 + \underline{\quad} = 7$

NAME \_\_\_\_\_

DATE \_\_\_\_\_

# Bugs in the House Subtraction

<p><b>example a</b></p>  <p style="text-align: center;"><math>6 - \underline{4} = 2</math></p>	<p><b>example b</b></p>  <p style="text-align: center;"><math>\underline{6} - 3 = 3</math></p>
---	--

**1** Fill in the blank.

$6 - \underline{\quad} = 1$

$6 - \underline{\quad} = 2$

$6 - \underline{\quad} = 4$

$6 - \underline{\quad} = 0$

$6 - \underline{\quad} = 6$

$6 - \underline{\quad} = 5$

$\underline{\quad} - 4 = 2$

$\underline{\quad} - 3 = 3$

$6 - 1 = \underline{\quad}$

$6 - 4 = \underline{\quad}$

$6 - 2 = \underline{\quad}$

$6 - 5 = \underline{\quad}$

**2** Solve the subtraction problems.

$$\begin{array}{r} 5 \\ - 2 \\ \hline \end{array}$$

$$\begin{array}{r} 4 \\ - 2 \\ \hline \end{array}$$

$$\begin{array}{r} 1 \\ - 1 \\ \hline \end{array}$$

$$\begin{array}{r} 3 \\ - 0 \\ \hline \end{array}$$

$$\begin{array}{r} 5 \\ - 1 \\ \hline \end{array}$$

$$\begin{array}{r} 2 \\ - 2 \\ \hline \end{array}$$

$$\begin{array}{r} 3 \\ - 2 \\ \hline \end{array}$$

$$\begin{array}{r} 5 \\ - 3 \\ \hline \end{array}$$

$$\begin{array}{r} 4 \\ - 1 \\ \hline \end{array}$$

$$\begin{array}{r} 3 \\ - 3 \\ \hline \end{array}$$

$$\begin{array}{r} 3 \\ - 1 \\ \hline \end{array}$$

$$\begin{array}{r} 5 \\ - 0 \\ \hline \end{array}$$

$$\begin{array}{r} 4 \\ - 0 \\ \hline \end{array}$$

$$\begin{array}{r} 2 \\ - 1 \\ \hline \end{array}$$

$$\begin{array}{r} 1 \\ - 0 \\ \hline \end{array}$$

$$\begin{array}{r} 4 \\ - 3 \\ \hline \end{array}$$

$$\begin{array}{r} 5 \\ - 4 \\ \hline \end{array}$$

$$\begin{array}{r} 2 \\ - 0 \\ \hline \end{array}$$

$$\begin{array}{r} 5 \\ - 5 \\ \hline \end{array}$$


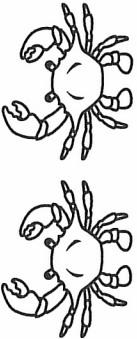

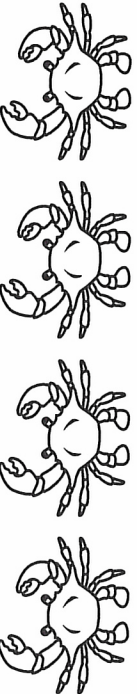

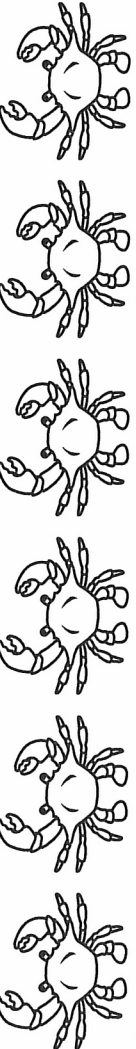
$$\begin{array}{r} 4 \\ - 4 \\ \hline \end{array}$$

$$\begin{array}{r} 0 \\ - 0 \\ \hline \end{array}$$

NAME \_\_\_\_\_ DATE \_\_\_\_\_

# Crabs Have Ten Legs & Two Eyes

Write the correct number word for each row. Write the number of legs and eyes in the boxes.

1			10 legs	2 eyes
2			legs	eyes
3			legs	eyes
4			legs	eyes
5			legs	eyes
6			legs	eyes

- 1      2      3      4      5      6  
 one    two    three    four    five    six










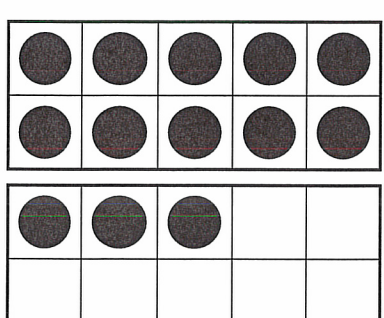


NAME \_\_\_\_\_

DATE \_\_\_\_\_

# Fast Tens Addition

Fill in each answer below.

<p><b>1</b></p> $\begin{array}{r} 10 \\ + 8 \\ \hline \end{array}$ 	<p><b>2</b></p> $\begin{array}{r} 10 \\ + 2 \\ \hline \end{array}$ 
<p><b>3</b></p> $\begin{array}{r} 10 \\ + 6 \\ \hline \end{array}$ 	<p><b>4</b></p> $\begin{array}{r} 10 \\ + 4 \\ \hline \end{array}$ 
<p><b>5</b></p> $\begin{array}{r} 10 \\ + 1 \\ \hline \end{array}$ 	<p><b>6</b></p> $\begin{array}{r} 10 \\ + 5 \\ \hline \end{array}$ 
<p><b>7</b></p> $\begin{array}{r} 10 \\ + 7 \\ \hline \end{array}$ 	<p><b>8</b></p> $\begin{array}{r} 10 \\ + 3 \\ \hline \end{array}$ 

NAME \_\_\_\_\_

DATE \_\_\_\_\_

# Fast Tens

**1** Write the answer to each problem:

$10 + 2 = \underline{\quad}$

$10 + 5 = \underline{\quad}$

$10 + 9 = \underline{\quad}$

$10 + 0 = \underline{\quad}$

$10 + 7 = \underline{\quad}$

$10 + 4 = \underline{\quad}$

$10 + 8 = \underline{\quad}$

$10 + 1 = \underline{\quad}$

$10 + 3 = \underline{\quad}$

$10 + 6 = \underline{\quad}$

$3 + 10 = \underline{\quad}$

$7 + 10 = \underline{\quad}$

$8 + 10 = \underline{\quad}$

$5 + 10 = \underline{\quad}$

$0 + 10 = \underline{\quad}$

$1 + 10 = \underline{\quad}$

$9 + 10 = \underline{\quad}$

$6 + 10 = \underline{\quad}$

$4 + 10 = \underline{\quad}$

$2 + 10 = \underline{\quad}$

$10 + 10 = \underline{\quad}$

**2** Fill in the missing numbers.

**a** Count by 1's.

10, 11, \_\_\_\_\_, 13, \_\_\_\_\_, \_\_\_\_\_, 16, 17, \_\_\_\_\_, \_\_\_\_\_, 20

**b** Count by 10's.

10, 20, \_\_\_\_\_, 40, \_\_\_\_\_, \_\_\_\_\_, \_\_\_\_\_, 80, \_\_\_\_\_, 100

**c** Count by 5's.

5, 10, 15, \_\_\_\_\_, \_\_\_\_\_, 30, \_\_\_\_\_, 40 \_\_\_\_\_, \_\_\_\_\_, 55, \_\_\_\_\_, \_\_\_\_\_, 70

**d** Count backwards by 1's.

14, 13, \_\_\_\_\_, 11, \_\_\_\_\_, 9, 8, \_\_\_\_\_, \_\_\_\_\_, 5, \_\_\_\_\_, \_\_\_\_\_, \_\_\_\_\_, 1



## CHALLENGE

**3** Fill in the missing numbers.

**a** Count by \_\_\_\_\_ 's.

**b** 3, 5, \_\_\_\_\_, 9, 11, \_\_\_\_\_, \_\_\_\_\_, 17, \_\_\_\_\_, \_\_\_\_\_, 23, \_\_\_\_\_, 27 \_\_\_\_\_, 31